

Comparing Places

Your Challenge:

Identify these different images and study the craters. Which craters were caused by impacts and which were caused by volcanic activity?



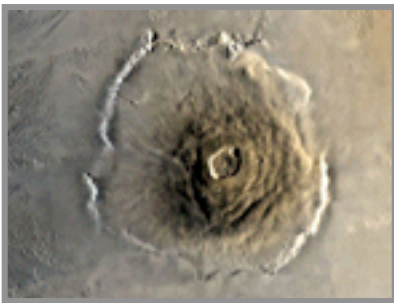
A _____




B _____




C _____



D _____



E _____




F _____

Surfaces with impact craters: _____

Surfaces with volcanic craters: _____

How can you tell the difference?



G _____

Identify the largest body shown in any of the photographs: _____

Identify the largest feature shown in any of the photographs: _____

(There are several possible answers. Be prepared to defend your choice.)